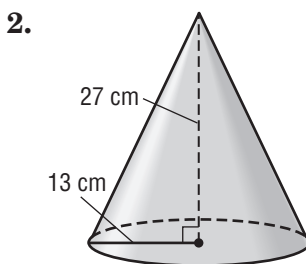
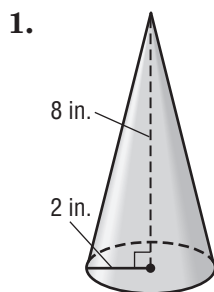


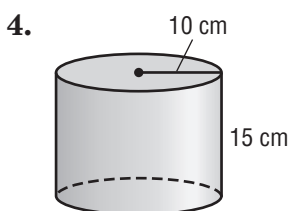
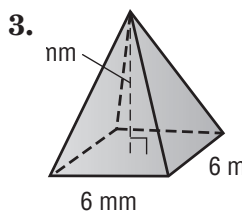
Pretest

Find the volume of each figure. Round to the nearest tenth if necessary.



1. 33.5 in³

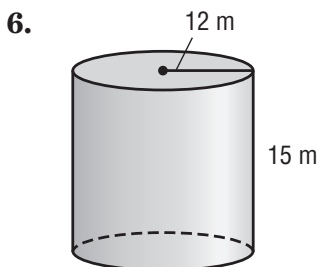
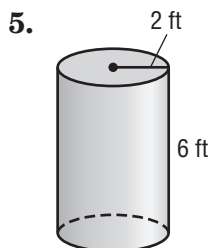
2. 4,778.4 cm³



3. 282.7 ft³

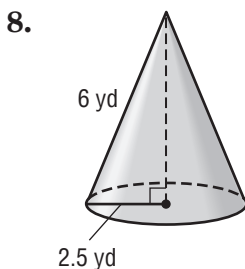
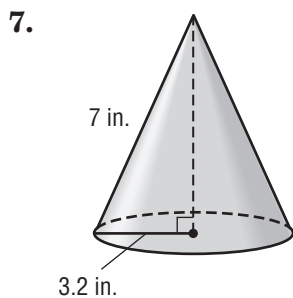
4. 4,712.4 cm³

Find the surface area of each figure. Round to the nearest tenth if necessary.



5. 100.5 ft²

6. 2,035.8 m²



7. 102.5 in²

8. 66.8 yd²

Copyright © The McGraw-Hill Companies, Inc. Permission is granted to reproduce for classroom use.